


PROBLEM 16

Numbers 1 2 3

Level
2

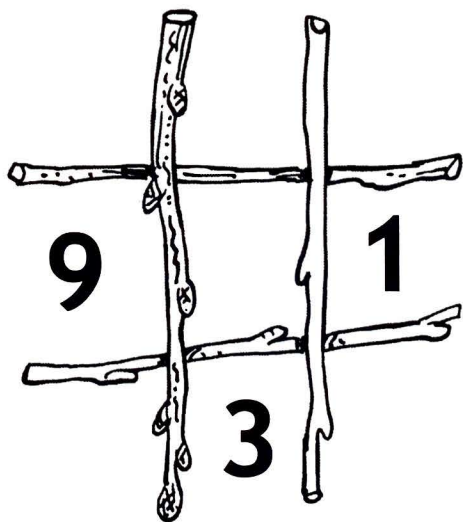
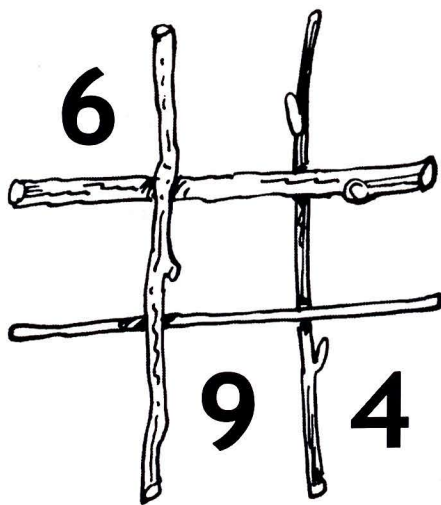
Nut stores

A squirrel is burying some nuts under a tree. Each row, column and diagonal contains the same number of nuts. There is a different number of nuts in each place.



★ How many nuts should be buried in the empty places?

In the same way, the squirrel buries nuts under two other trees.



★ How many nuts should be buried in the empty places?