

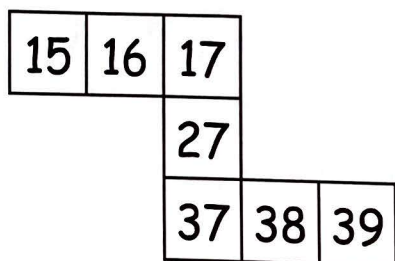
PROBLEM 24

Numbers 123


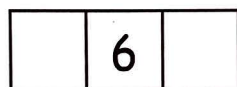
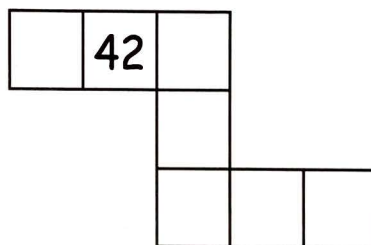
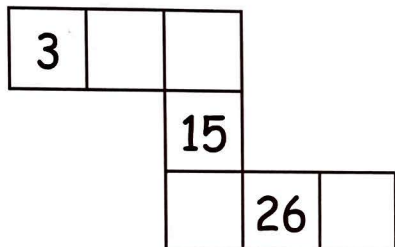
Level
2

100-square puzzle

This shape has fallen off a 100-square.



★ What do you notice about the numbers in the shape?



★ What are the missing numbers in these shapes? How do you know?