

How many objects are in each group?

Remember to draw one and then cross it out from the top.

You may want to use objects to help you.



| | |
|--|--|
| | |
|--|--|

There are cakes in each group.



| | | |
|--|--|--|
| | | |
|--|--|--|

There are pears in each group.



| | | | |
|--|--|--|--|
| | | | |
|--|--|--|--|

There are flowers in each group.



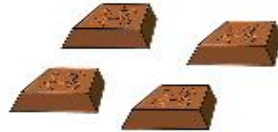
| | |
|--|--|
| | |
|--|--|

There are glasses in each group.

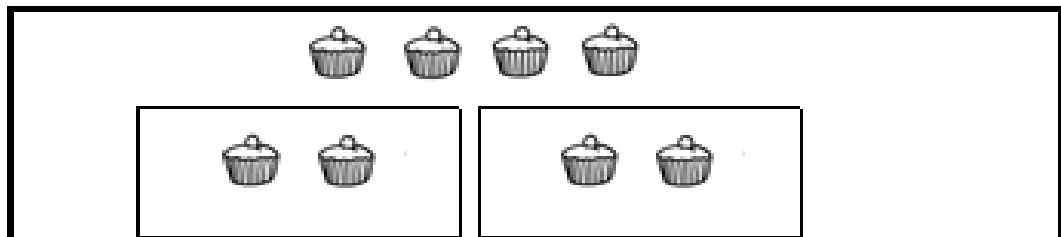
Challenge

True or false? Explain your answer.

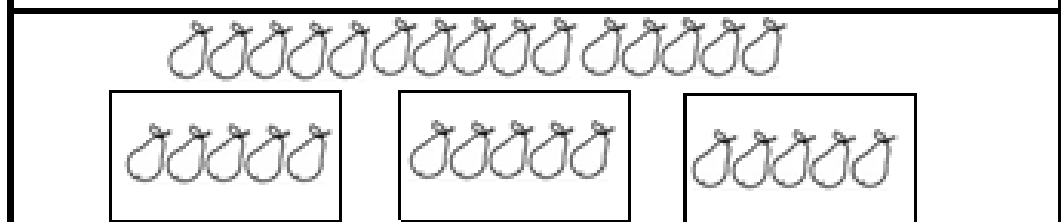
I have divided my chocolate fairly into four groups. Each group has three pieces of chocolate.




Answers




There are cakes in each group.



There are pears in each group.



There are flowers in each group.



There are glasses in each group.

False because the boy has divided his chocolate into three groups instead of four groups. Each group has four pieces of chocolate instead of three pieces.